

Name: _____

Primary 5-a-day

Bronze



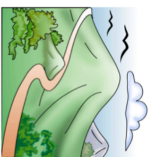
24th October

$$50 + 100 + 70$$

$$62 \times 3$$

<input type="text"/>

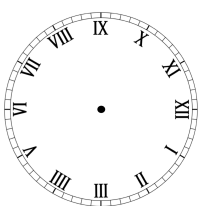
<input type="text"/>



Altmore 538m
Heathmount 551m
Slemish 499m
Donard 542m
Cley Hill 517m

How much taller is Cley Hill than Slemish?

Show the time 4:50pm on the clock



Write down the **value** of the **6** in the number 5267

Name: _____

Primary 5-a-day

Bronze



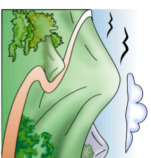
24th October

$$50 + 100 + 70$$

$$62 \times 3$$

<input type="text"/>

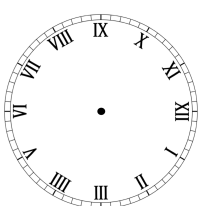
<input type="text"/>



Altmore 538m
Heathmount 551m
Slemish 499m
Donard 542m
Cley Hill 517m

How much taller is Cley Hill than Slemish?

Show the time 4:50pm on the clock



Write down the **value** of the **6** in the number 5267