

Name: _____

Primary 5-a-day

Bronze



26th October

$$32 \div 2$$

<input type="text"/>

$$80 - 11$$

<input type="text"/>

Natalie has 9 fifty pence pieces

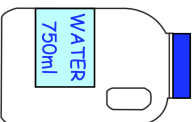


How much money does Natalie have?

A bottle of water holds 750 millilitres

300 millilitres of water is poured out

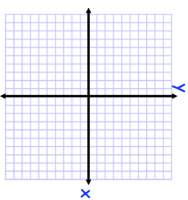
How much water is left?



Kirsty say that the x-axis and y-axis are parallel.

Chloe says the x-axis and y-axis are perpendicular.

Who do you agree with?



Name: _____

Primary 5-a-day

Bronze



26th October

$$32 \div 2$$

<input type="text"/>

$$80 - 11$$

<input type="text"/>

Natalie has 9 fifty pence pieces

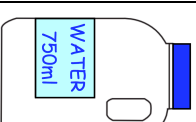


How much money does Natalie have?

A bottle of water holds 750 millilitres

300 millilitres of water is poured out

How much water is left?



Kirsty say that the x-axis and y-axis are parallel.

Chloe says the x-axis and y-axis are perpendicular.

Who do you agree with?

