

Name: \_\_\_\_\_

Primary 5-a-day

Bronze



30th October


$$701 - 5$$

$$\frac{1}{4} \text{ of } 48$$

Which shape has no parallel sides?



Square




Rectangle



Rhombus



Trapezium



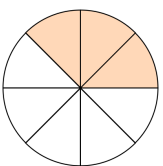
Parallelogram



Kite

James wants to shade  $\frac{5}{8}$  of this shape

Complete the shading.



Chloe wants to buy 3 suitcases.

Two suitcases cost £26 each and the other suitcase costs £15.

What is the total cost of the three suitcases?

Name: \_\_\_\_\_

Primary 5-a-day

Bronze



30th October


$$701 - 5$$

$$\frac{1}{4} \text{ of } 48$$

Which shape has no parallel sides?



Square



Rectangle



Rhombus



Trapezium



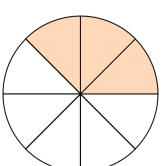
Parallelogram



Kite

James wants to shade  $\frac{5}{8}$  of this shape

Complete the shading.



Chloe wants to buy 3 suitcases.

Two suitcases cost £26 each and the other suitcase costs £15.

What is the total cost of the three suitcases?