

Name: _____

Primary 5-a-day

Bronze



11th September

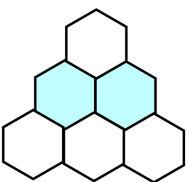
$$600 - 180$$

$$60 \div \square = 6$$

--

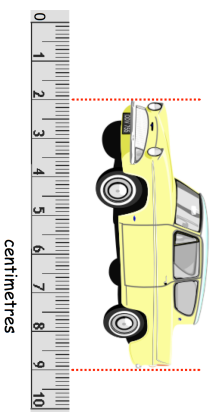
--

What fraction of this shape is shaded?



Here is a model car on a centimeter scale.

How long is the car?



Write the numbers below into the correct box

15 18 25 31 35 40

multiple of 5

not a multiple of 5

Name: _____

Primary 5-a-day

Bronze



11th September

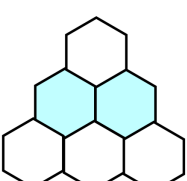
$$600 - 180$$

$$60 \div \square = 6$$

--

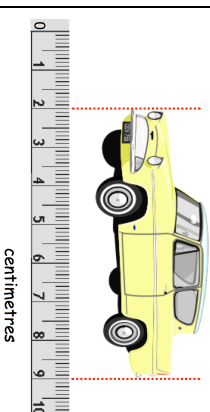
--

What fraction of this shape is shaded?



Here is a model car on a centimeter scale.

How long is the car?



Write the numbers below into the correct box

15 18 25 31 35 40

multiple of 5

not a multiple of 5