

Name: _____

Primary 5-a-day

Bronze



20th September

$$1,000 - 30$$

<input type="text"/>

Circle the **even** numbers

- | | | |
|----|----|----|
| 27 | 24 | 21 |
| 29 | 26 | 28 |

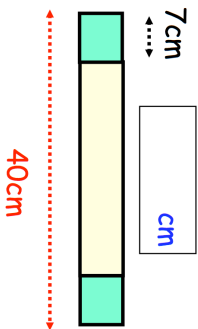
<input type="text"/>

$$\begin{array}{r} 3 \\ \times 96 \\ \hline \end{array}$$

A yellow block and two green blocks are placed in a row.

The two green blocks are the same size.

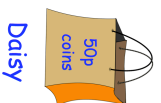
Find the length of the yellow block



Emma has a bag of 20p coins and Daisy has a bag of 50p coins. Both bags have the same amount of money inside. There are **six** 50p coins in Daisy's bag. How many 20p coins are there in Emma's bag?



Emma



Daisy

Name: _____

Primary 5-a-day

Bronze



20th September

$$1,000 - 30$$

<input type="text"/>

Circle the **even** numbers

- | | | |
|----|----|----|
| 27 | 24 | 21 |
| 29 | 26 | 28 |

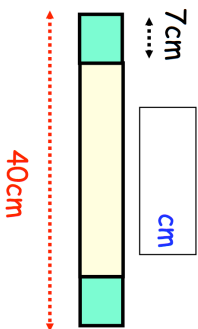
<input type="text"/>

$$\begin{array}{r} 3 \\ \times 96 \\ \hline \end{array}$$

A yellow block and two green blocks are placed in a row.

The two green blocks are the same size.

Find the length of the yellow block



Emma has a bag of 20p coins and Daisy has a bag of 50p coins. Both bags have the same amount of money inside. There are **six** 50p coins in Daisy's bag. How many 20p coins are there in Emma's bag?



Emma



Daisy