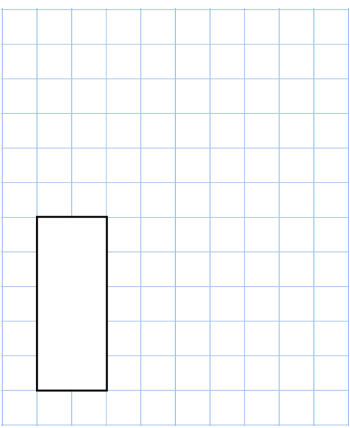
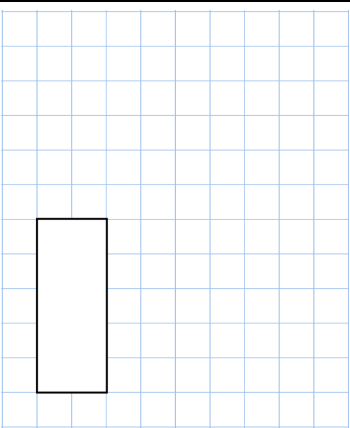
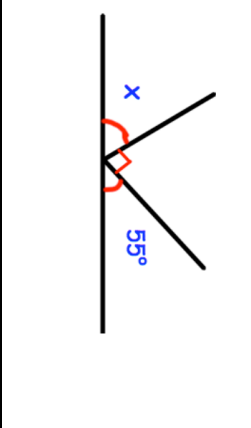



Name: _____

Primary 5-a-day

Gold



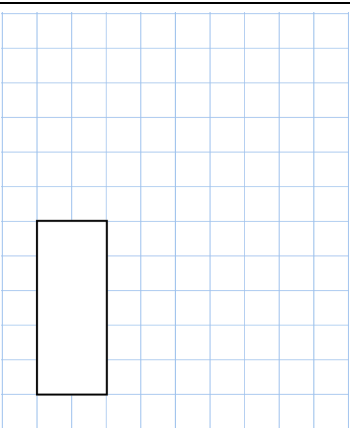
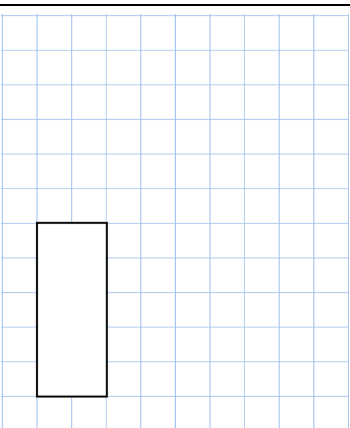
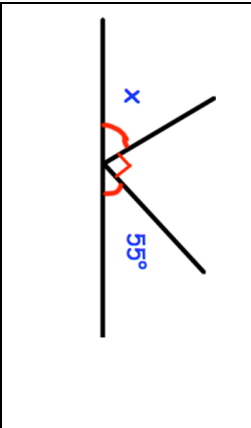
<p>11th April</p>	<p>11th April</p>
$\frac{1}{4} + \frac{5}{12} + \frac{1}{4}$	$500 - 530$
	
<p>Noah chooses a prime number</p> <p>He rounds it to the nearest ten.</p> <p>His answer is 20.</p> <p>Write down all the possible prime numbers Noah could have chosen.</p>	
	<p>Find the size of angle x</p>
<p>Here is a grid of 20 squares.</p> <p>What percentage of the grid is shaded?</p>	

Name: _____

Primary 5-a-day

Gold



<p>11th April</p>	<p>11th April</p>
$\frac{1}{4} + \frac{5}{12} + \frac{1}{4}$	$500 - 530$
	
<p>Noah chooses a prime number</p> <p>He rounds it to the nearest ten.</p> <p>His answer is 20.</p> <p>Write down all the possible prime numbers Noah could have chosen.</p>	
	<p>Find the size of angle x</p>
<p>Here is a grid of 20 squares.</p> <p>What percentage of the grid is shaded?</p>	