

Name: _____

Primary 5-a-day

Gold



20th April

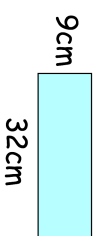
$$-24 + 31$$

$$\begin{array}{r} 9 \\ \hline 7182 \end{array}$$

Write the number 700 in Roman numerals

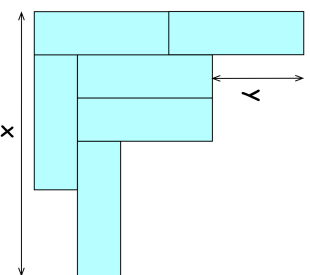


Phoebe has some rectangles.
They each measure 32cm by 9cm.



She makes this design with six of the rectangles.

Work out the lengths x and y



Name: _____

Primary 5-a-day

Gold



20th April


$$-24 + 31$$

$$\begin{array}{r} 9 \\ \hline 7182 \end{array}$$

Write the number 700 in Roman numerals



Phoebe has some rectangles.
They each measure 32cm by 9cm.



She makes this design with six of the rectangles.

Work out the lengths x and y

