

Name: \_\_\_\_\_

Primary 5-a-day

Gold



30th April

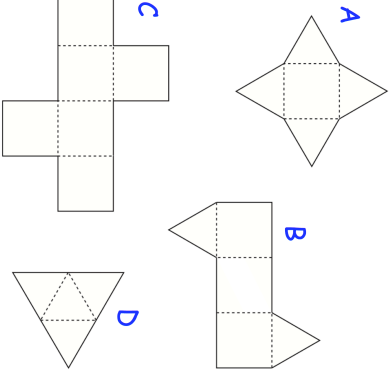
$\frac{7}{20}$  of 1,960

Grid for calculation

$406 \times 17$

Grid for calculation

Here are some nets



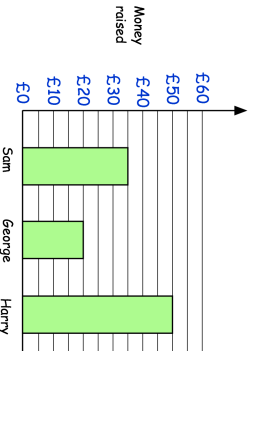
Which letter is the net of a cuboid?

Blank space for answer

Which letter is the net of a triangular prism?

Blank space for answer

Work out the mean amount of money raised



Name: \_\_\_\_\_

Primary 5-a-day

Gold



30th April

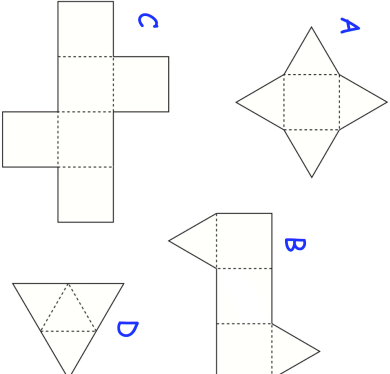
$\frac{7}{20}$  of 1,960

Grid for calculation

$406 \times 17$

Grid for calculation

Here are some nets



Which letter is the net of a cuboid?

Blank space for answer

Which letter is the net of a triangular prism?

Blank space for answer

Work out the mean amount of money raised

