

8th April



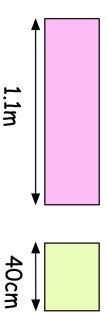
10% of 700

$$\frac{9}{10} - \frac{2}{5}$$

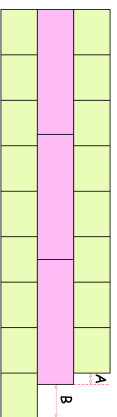
--

--

Calculate the length of A



Toby makes a pattern with the rectangles above



Calculate the length of B

Chloe has completed her homework.

What has Chloe done wrong?

$$\begin{aligned} \text{(a)} \quad \frac{3}{4} &= \frac{\boxed{4}}{16} \\ \text{(b)} \quad \frac{\boxed{3}}{5} &= \frac{6}{15} \end{aligned}$$

8th April



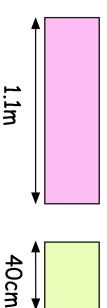
10% of 700

$$\frac{9}{10} - \frac{2}{5}$$

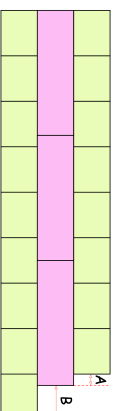
--

--

Calculate the length of A



Toby makes a pattern with the rectangles above



Calculate the length of B

Chloe has completed her homework.

What has Chloe done wrong?

$$\begin{aligned} \text{(a)} \quad \frac{3}{4} &= \frac{\boxed{4}}{16} \\ \text{(b)} \quad \frac{\boxed{3}}{5} &= \frac{6}{15} \end{aligned}$$