

Name: _____

Primary 5-a-day

Gold



16th August

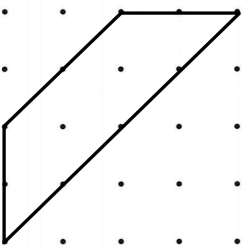
Simplify $\frac{24}{30}$

--

$132 \div 12$

--

Paul draws this shape on a grid



He turns his grid one quarter turn anticlockwise

Draw the shape in its new position after the turn



Clara runs 1.3 kilometres every day.
Work out how far Clara runs in one week

Give your answer in metres

Name: _____

Primary 5-a-day

Gold



16th August

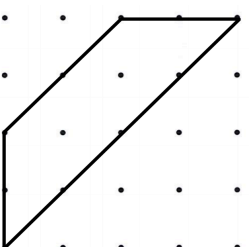
Simplify $\frac{24}{30}$

--

$132 \div 12$


--

Paul draws this shape on a grid



He turns his grid one quarter turn anticlockwise

Draw the shape in its new position after the turn



Clara runs 1.3 kilometres every day.
Work out how far Clara runs in one week

Give your answer in metres