

Name: _____

Primary 5-a-day

Gold



25th August

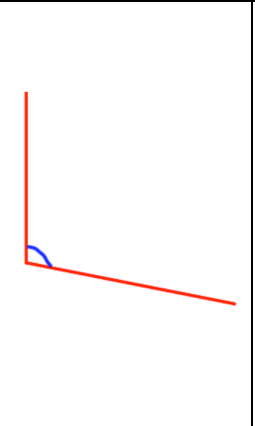

$$484.5 \div 100$$

Grid area for the first calculation.

$$\frac{3}{4} - \frac{5}{16}$$

Grid area for the second calculation.

Measure this angle



The table shows the number of people living in three different countries.

Country	Population
Canada	36,624,199
Mexico	129,684,378
Turkey	81,127,417

What is the difference between the numbers of people living in Mexico and Canada.

2.5 tonnes = grams

Name: _____

Primary 5-a-day

Gold



25th August

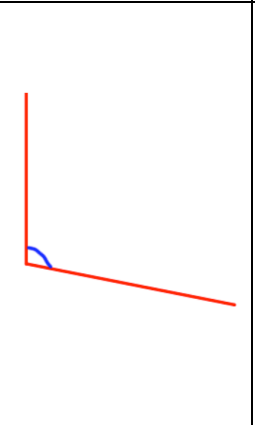

$$484.5 \div 100$$

Grid area for the first calculation.

$$\frac{3}{4} - \frac{5}{16}$$

Grid area for the second calculation.

Measure this angle



The table shows the number of people living in three different countries.

Country	Population
Canada	36,624,199
Mexico	129,684,378
Turkey	81,127,417

What is the difference between the numbers of people living in Mexico and Canada.

2.5 tonnes = grams