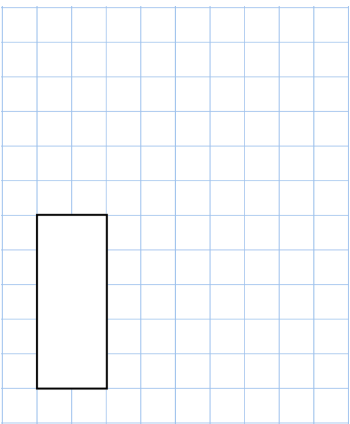
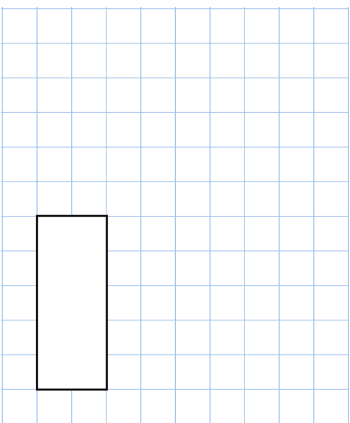
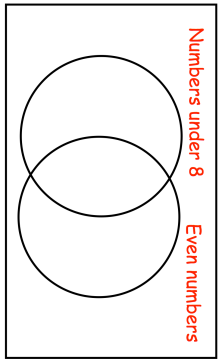
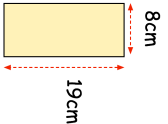
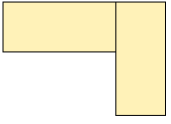


Name: _____

Primary 5-a-day

Gold



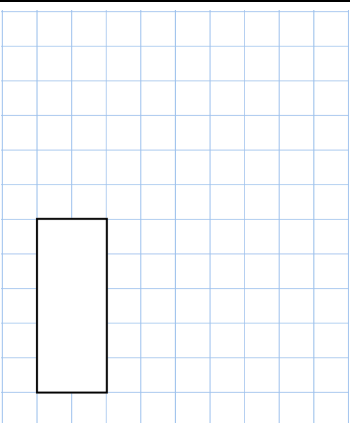
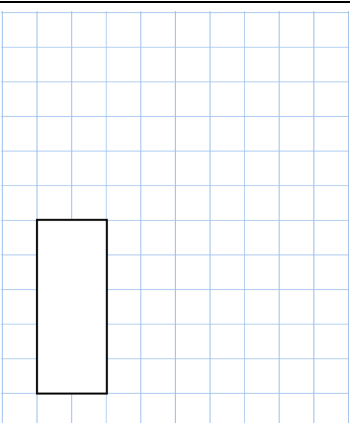
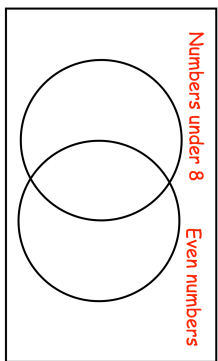
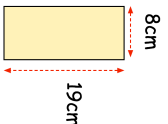
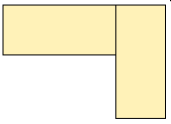
<p>5th August</p> <p>Simplify $\frac{16}{24}$</p> 	<p>$305 \times 1,000$</p> 
<p>Put these numbers in the correct place on the diagram</p> <p>4 5 8 9 10</p>	<p>Numbers under 8 Even numbers</p> 
<p>A shape is made from two rectangular tiles like this</p>  <p>8cm 19cm</p> <p>This is the shape</p> 	<p>Work out the area of the shape</p> <p>Work out the perimeter of the shape</p>

Name: _____

Primary 5-a-day

Gold



<p>5th August</p> <p>Simplify $\frac{16}{24}$</p> 	<p>$305 \times 1,000$</p> 
<p>Put these numbers in the correct place on the diagram</p> <p>4 5 8 9 10</p>	<p>Numbers under 8 Even numbers</p> 
<p>A shape is made from two rectangular tiles like this</p>  <p>8cm 19cm</p> <p>This is the shape</p> 	<p>Work out the area of the shape</p> <p>Work out the perimeter of the shape</p>