

Name: \_\_\_\_\_

Primary 5-a-day

Gold



1st December

14<sup>2</sup>

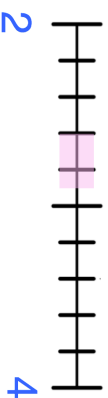
Grid for calculation

Answer box

$$\frac{42}{9} = 4 \frac{\square}{9}$$

Grid for calculation

Answer box



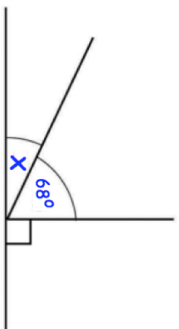
2

4

Circle all the numbers below that belong in the shaded part of the number line.

- $2\frac{1}{2}$
- $2\frac{4}{5}$
- $2\frac{1}{4}$
- $2\frac{2}{3}$

Work out the size of angle x



Mike scored 31 out of 50 in a test.

The pass mark is 60%

Did Mike pass the test?



Name: \_\_\_\_\_

Primary 5-a-day

Gold



1st December

14<sup>2</sup>

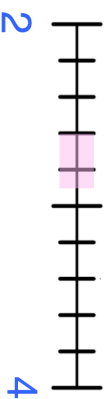
Grid for calculation

Answer box

$$\frac{42}{9} = 4 \frac{\square}{9}$$

Grid for calculation

Answer box



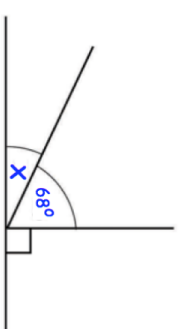
2

4

Circle all the numbers below that belong in the shaded part of the number line.

- $2\frac{1}{2}$
- $2\frac{4}{5}$
- $2\frac{1}{4}$
- $2\frac{2}{3}$

Work out the size of angle x



Mike scored 31 out of 50 in a test.

The pass mark is 60%

Did Mike pass the test?

