

Name: _____

Primary 5-a-day

Gold



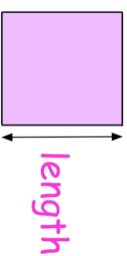
12th July

11^2

The area of this square is 36cm^2

Work out the length of each side of the square

85×37

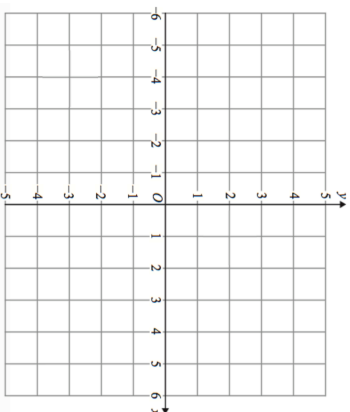


Kim is drawing a parallelogram on the grid. She plots three points.

$(-2, 3)$ $(-1, -2)$ $(4, 3)$

Plot these points

Kim has one more point to plot.
Write down the coordinates of the fourth vertex of the parallelogram



Name: _____

Primary 5-a-day

Gold



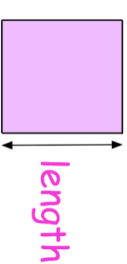
12th July

11^2

The area of this square is 36cm^2

Work out the length of each side of the square

85×37



Kim is drawing a parallelogram on the grid. She plots three points.

$(-2, 3)$ $(-1, -2)$ $(4, 3)$

Plot these points

Kim has one more point to plot.
Write down the coordinates of the fourth vertex of the parallelogram

