

Name: _____

Primary 5-a-day

Gold



20th July

$$3 \square = 27$$

<input type="text"/>

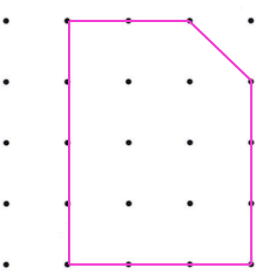
$$\frac{2}{3} + \frac{1}{6}$$

<input type="text"/>

Change 1.4 litres into millilitres


Change 56 centimetres into metres

Paul draws this shape on a grid



He turns his grid one quarter turn clockwise

Draw the shape in its new position after the turn



Name: _____

Primary 5-a-day

Gold



20th July

$$3 \square = 27$$

<input type="text"/>

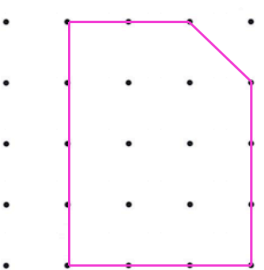
$$\frac{2}{3} + \frac{1}{6}$$

<input type="text"/>

Change 1.4 litres into millilitres

Change 56 centimetres into metres

Paul draws this shape on a grid



He turns his grid one quarter turn clockwise

Draw the shape in its new position after the turn

