



Name: \_\_\_\_\_

Primary 5-a-day

Gold





<p><b>22nd July</b></p> <p><b>50% of 28</b></p>	<p>6 <u>4 8 9 0</u></p>
<p>A bus leaves Antrim Bus Station every 15 minutes. A train leaves Antrim Train Station every 18 minutes.</p> <p>At 8am a bus and a train leave the stations at the same time.</p>	<p>When is the next time that a bus and a train leave at the same time?</p>  
<p>Jemima receives £5 pocket money. She spends £3. What percentage of the £5 does she have left?</p>	
<p>A <b>square</b> number and a <b>prime</b> number have a total of 17 What are the two numbers?</p>	<p>square number + prime number = 17</p>

Name: \_\_\_\_\_

Primary 5-a-day

Gold



<p><b>22nd July</b></p> <p><b>50% of 28</b></p>	<p>6 <u>4 8 9 0</u></p>
<p>A bus leaves Antrim Bus Station every 15 minutes. A train leaves Antrim Train Station every 18 minutes.</p> <p>At 8am a bus and a train leave the stations at the same time.</p>	<p>When is the next time that a bus and a train leave at the same time?</p>  
<p>Jemima receives £5 pocket money. She spends £3. What percentage of the £5 does she have left?</p>	
<p>A <b>square</b> number and a <b>prime</b> number have a total of 17 What are the two numbers?</p>	<p>square number + prime number = 17</p>