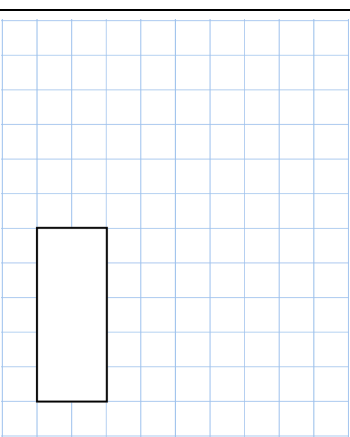
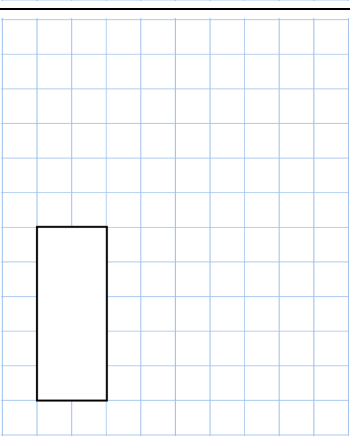


Name: _____

Primary 5-a-day

Gold



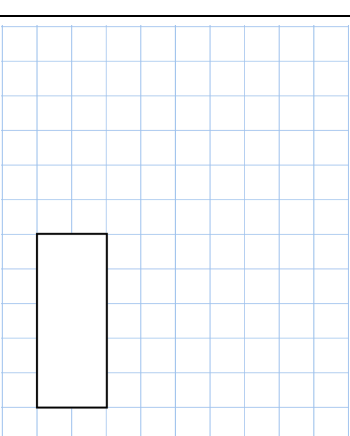
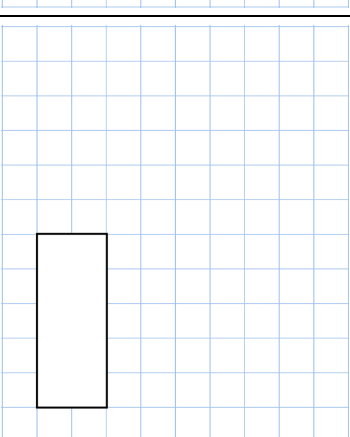
<p>9th June</p> <p>13×12</p>	<p>20% of 120</p>
 <input data-bbox="954 347 1024 526" type="text"/>	 <input data-bbox="954 784 1024 963" type="text"/>
<p>Write down the coordinates of point A.</p>	<p>Dani uses coordinates A and B as two of the vertices of a right angled triangle. What are the coordinates of the missing vertex?</p>
<p>Here are four numbers in Roman numerals</p> <p>XC LXXV CII LVIII</p>	<p>Write the numbers in order, starting with the smallest.</p>

Name: _____

Primary 5-a-day

Gold



<p>9th June</p> <p>13×12</p>	<p>20% of 120</p>
 <input data-bbox="954 1444 1024 1624" type="text"/>	 <input data-bbox="954 1881 1024 2060" type="text"/>
<p>Write down the coordinates of point A.</p>	<p>Dani uses coordinates A and B as two of the vertices of a right angled triangle. What are the coordinates of the missing vertex?</p>
<p>Here are four numbers in Roman numerals</p> <p>XC LXXV CII LVIII</p>	<p>Write the numbers in order, starting with the smallest.</p>