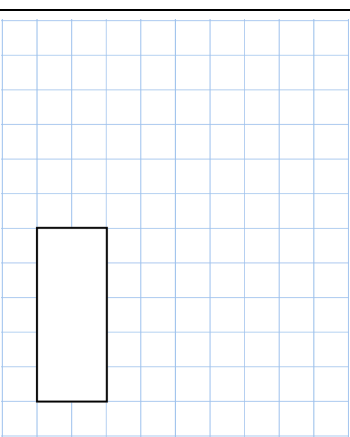
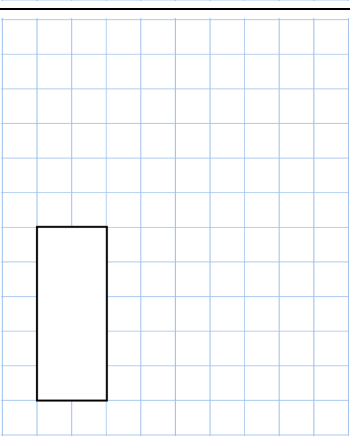


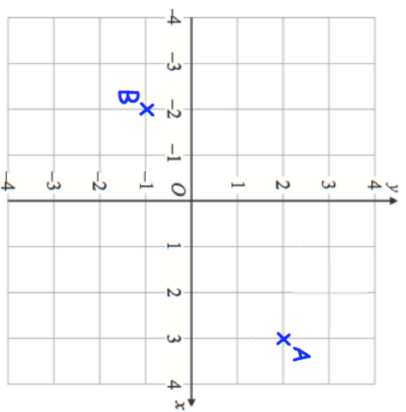
Name: _____

Primary 5-a-day

Gold



<p>9th June</p> <p>13×12</p>	<p>20% of 120</p>
 <input data-bbox="949 347 1029 526" type="text"/>	 <input data-bbox="949 784 1029 963" type="text"/>
<p>Here are four numbers in Roman numerals</p> <p>XC LXXV CII LVIII</p>	<p>Write the numbers in order, starting with the smallest.</p>



Write down the coordinates of point A.

Dani uses coordinates A and B as two of the vertices of a right angled triangle. What are the coordinates of the missing vertex?

Write the numbers in order, starting with the **smallest**.

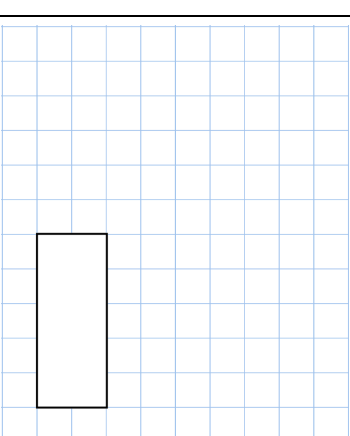
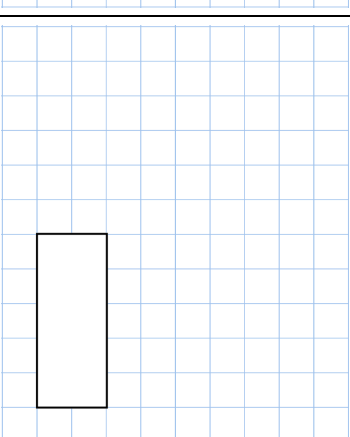
XC LXXV CII LVIII

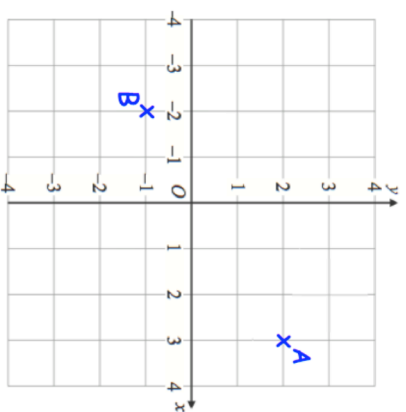
Name: _____

Primary 5-a-day

Gold



<p>9th June</p> <p>13×12</p>	<p>20% of 120</p>
 <input data-bbox="949 1444 1029 1624" type="text"/>	 <input data-bbox="949 1881 1029 2060" type="text"/>
<p>Here are four numbers in Roman numerals</p> <p>XC LXXV CII LVIII</p>	<p>Write the numbers in order, starting with the smallest.</p>



Write down the coordinates of point A.

Dani uses coordinates A and B as two of the vertices of a right angled triangle. What are the coordinates of the missing vertex?

Write the numbers in order, starting with the **smallest**.

XC LXXV CII LVIII