

Name: _____

Primary 5-a-day

Gold

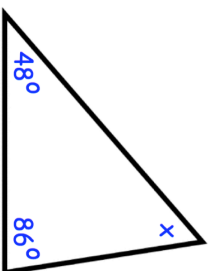


6th May

$$-51 + 20$$

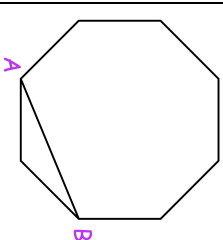
Grid for calculation

Work out the size of angle x



Grid for calculation

$$30\% \text{ of } 40$$



Here is a regular octagon with two vertices joined to make the line AB. Join two other vertices to draw a line parallel to AB

Southville	0630	0650	0720	0745
Leak	0703	0715	0751	0810
Milton	0824	0835	0920	0940

The timetable shows the times of trains from Southville to Milton.

Chloe lives in Southville and works in Milton.

Chloe wants to catch the train that takes the shortest time. What time train should she catch?

Name: _____

Primary 5-a-day

Gold

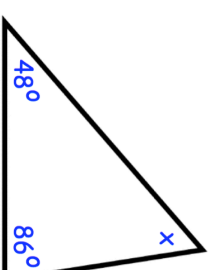


6th May

$$-51 + 20$$

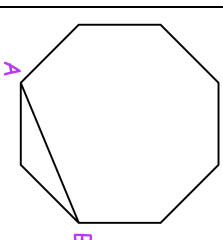
Grid for calculation

Work out the size of angle x



Grid for calculation

$$30\% \text{ of } 40$$



Here is a regular octagon with two vertices joined to make the line AB. Join two other vertices to draw a line parallel to AB

Southville	0630	0650	0720	0745
Leak	0703	0715	0751	0810
Milton	0824	0835	0920	0940

The timetable shows the times of trains from Southville to Milton.

Chloe lives in Southville and works in Milton.

Chloe wants to catch the train that takes the shortest time. What time train should she catch?