

Name: _____

Primary 5-a-day

Gold

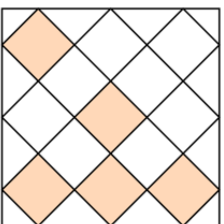


12th November

Simplify $\frac{15}{45}$

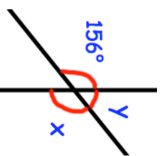
$$\begin{array}{r} 79 \\ \times 32 \\ \hline \end{array}$$

Shade one more square so this pattern has one line of symmetry



What size is angle x?

What size is angle y?



Here is a rule for the cost of a taxi

Cost = £5 plus an extra £1.50 for each mile

How much would a 7 mile journey cost?

Name: _____

Primary 5-a-day

Gold

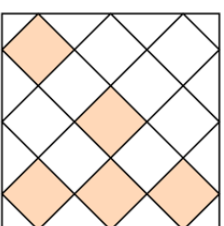


12th November

Simplify $\frac{15}{45}$

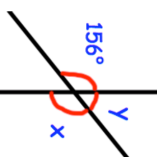
$$\begin{array}{r} 79 \\ \times 32 \\ \hline \end{array}$$

Shade one more square so this pattern has one line of symmetry



What size is angle x?

What size is angle y?



Here is a rule for the cost of a taxi

Cost = £5 plus an extra £1.50 for each mile

How much would a 7 mile journey cost?