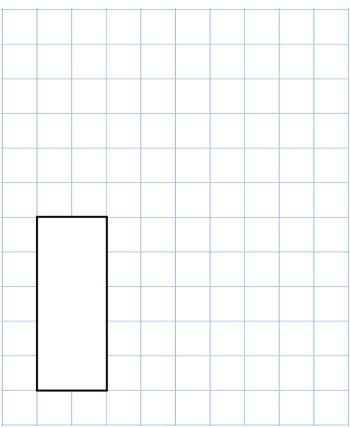
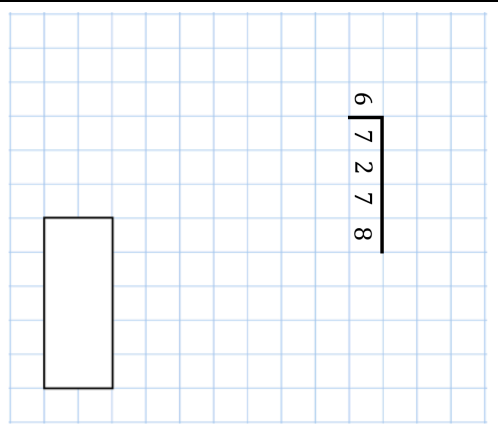
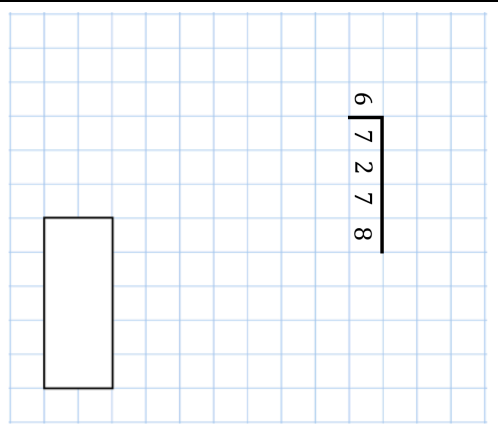
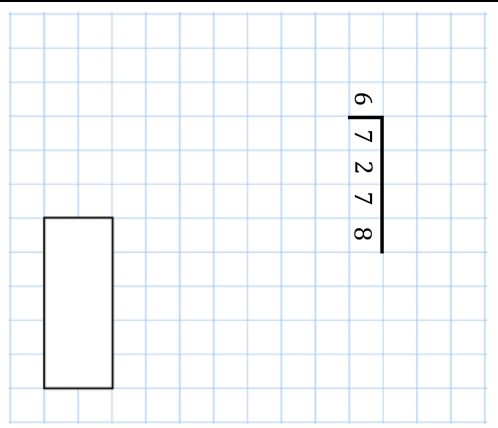


Name: _____

Primary 5-a-day

Gold



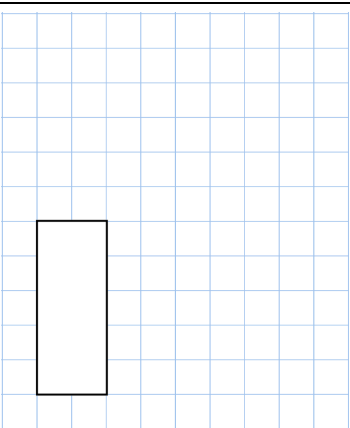
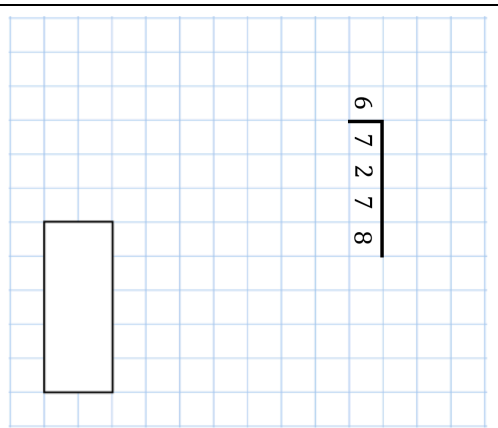
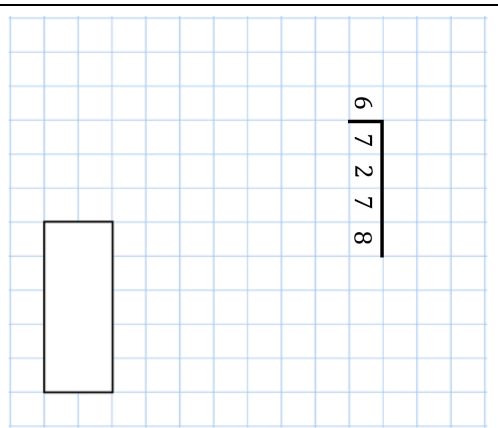
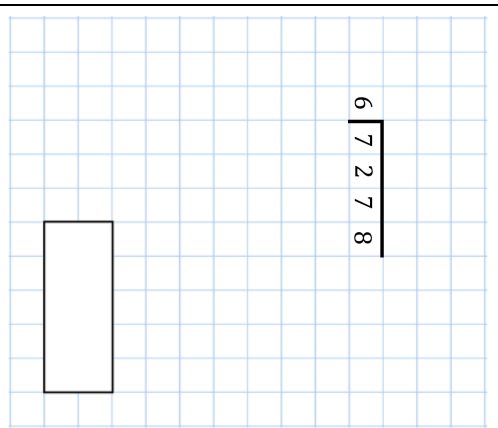
2nd November										
Simplify $\frac{35}{50}$										
	 $\begin{array}{r} 6 \\ \hline 7278 \end{array}$									
Circle all the cube numbers										
A square measures 30cm by 30cm A rectangle is 7cm longer and 2cm narrower than the square. What is the difference in area between the two shapes?	 <table border="1" data-bbox="708 577 903 985"><tr><td>36</td><td>64</td><td>100</td></tr><tr><td>52</td><td>27</td><td>125</td></tr><tr><td>81</td><td>300</td><td></td></tr></table>	36	64	100	52	27	125	81	300	
36	64	100								
52	27	125								
81	300									
Here is a number written in Roman numerals DCCI										
Write the number in figures										

Name: _____

Primary 5-a-day

Gold



2nd November										
Simplify $\frac{35}{50}$										
	 $\begin{array}{r} 6 \\ \hline 7278 \end{array}$									
Circle all the cube numbers										
A square measures 30cm by 30cm A rectangle is 7cm longer and 2cm narrower than the square. What is the difference in area between the two shapes?	 <table border="1" data-bbox="708 1668 903 2076"><tr><td>36</td><td>64</td><td>100</td></tr><tr><td>52</td><td>27</td><td>125</td></tr><tr><td>81</td><td>300</td><td></td></tr></table>	36	64	100	52	27	125	81	300	
36	64	100								
52	27	125								
81	300									
Here is a number written in Roman numerals DCCI										
Write the number in figures										