

Name: _____

Primary 5-a-day

Gold



20th November

$$\begin{array}{r} 89206 \\ -67317 \\ \hline \end{array}$$

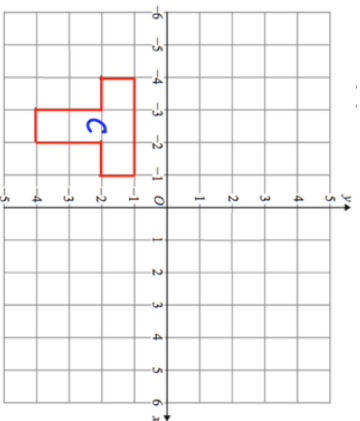
$$\frac{7}{8} \times 2$$



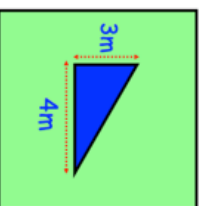
Here is a shape drawn on a coordinate grid.

The shape is translated **1 left** and **5 up**.

Draw the shape in its new position.



6m



Find the area of the garden that is grass.

Name: _____

Primary 5-a-day

Gold



20th November

$$\begin{array}{r} 89206 \\ -67317 \\ \hline \end{array}$$

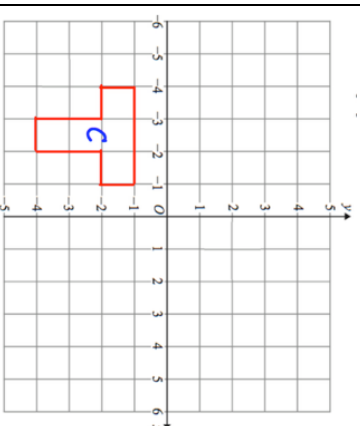
$$\frac{7}{8} \times 2$$



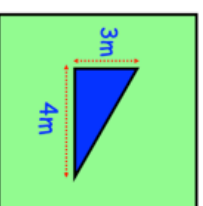
Here is a shape drawn on a coordinate grid.

The shape is translated **1 left** and **5 up**.

Draw the shape in its new position.



6m



Find the area of the garden that is grass.