



26th November

$$\frac{1}{5} = \boxed{} \%$$

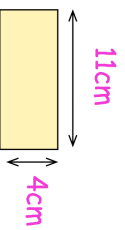
$$\frac{11}{12} - \frac{5}{6}$$

 %


Write down the first 12 square numbers

Zara has some identical rectangles.

What is the perimeter of Zara's shape?



She makes this shape using three of the rectangles



26th November

$$\frac{1}{5} = \boxed{} \%$$

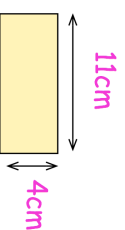
$$\frac{11}{12} - \frac{5}{6}$$

 %

Write down the first 12 square numbers

Zara has some identical rectangles.

What is the perimeter of Zara's shape?



She makes this shape using three of the rectangles

