

Name: _____

Primary 5-a-day

Gold



27th November

$$3,460 \div 100$$

--


$$\begin{array}{r} 84 \\ \times 67 \\ \hline \end{array}$$

--

Write these numbers in order, starting with the smallest.


9.21 1.9 9.119 9.2 1.29

This shape is made from four identical curves



The perimeter of the shape is 24 centimetres

A new shape is made out of curves of the same size



What is the perimeter of the new shape?

Name: _____

Primary 5-a-day

Gold



27th November

$$3,460 \div 100$$

--


$$\begin{array}{r} 84 \\ \times 67 \\ \hline \end{array}$$

--

Write these numbers in order, starting with the smallest.


9.21 1.9 9.119 9.2 1.29

This shape is made from four identical curves



The perimeter of the shape is 24 centimetres

A new shape is made out of curves of the same size



What is the perimeter of the new shape?