

Name: \_\_\_\_\_

Primary 5-a-day

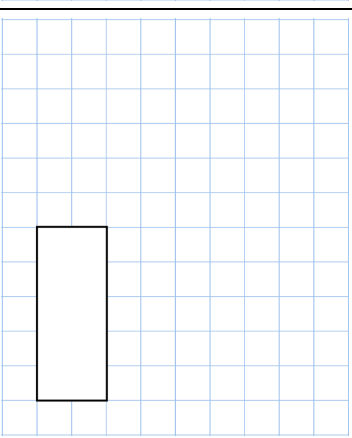
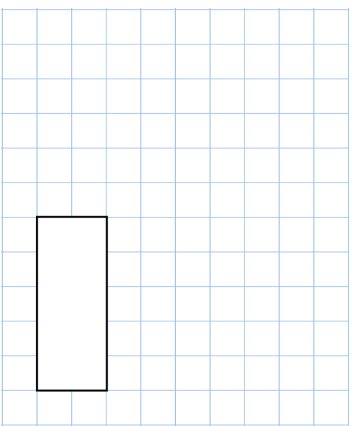
Gold



29th November

25% of 1,200

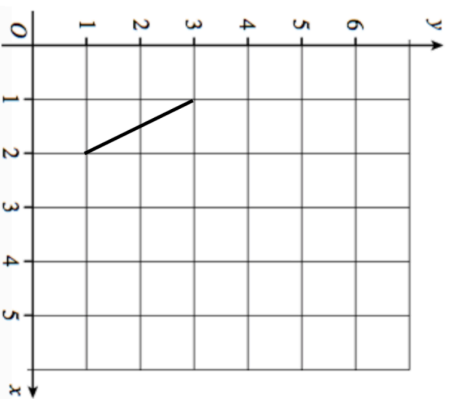
$$\frac{1}{6} + \frac{2}{3}$$



Here is one side of a square drawn on a coordinates grid.

The square has a vertex (3, 4).

Draw the other three sides of the square on the grid



The triangle and rectangle have an equal area.

Work out the length of the rectangle



Name: \_\_\_\_\_

Primary 5-a-day

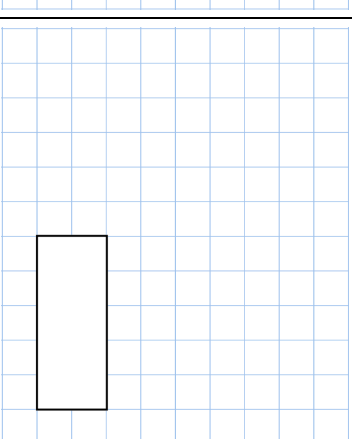
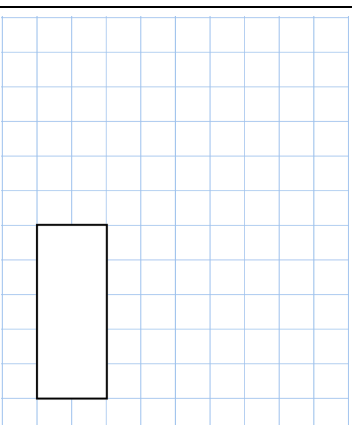
Gold



29th November

25% of 1,200

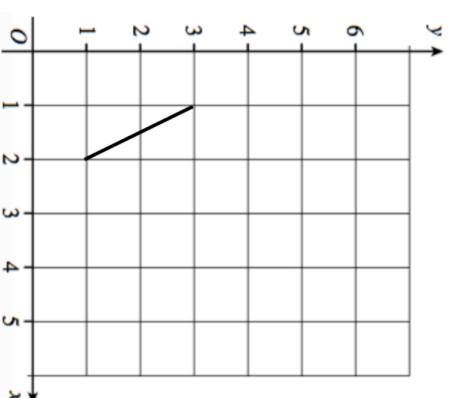
$$\frac{1}{6} + \frac{2}{3}$$



Here is one side of a square drawn on a coordinates grid.

The square has a vertex (3, 4).

Draw the other three sides of the square on the grid



The triangle and rectangle have an equal area.

Work out the length of the rectangle

