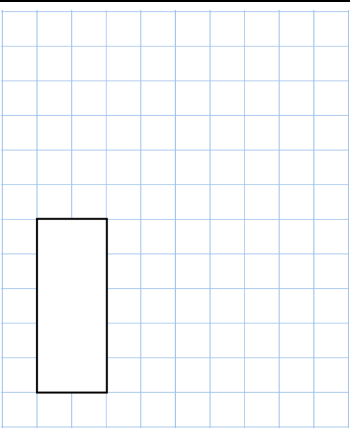
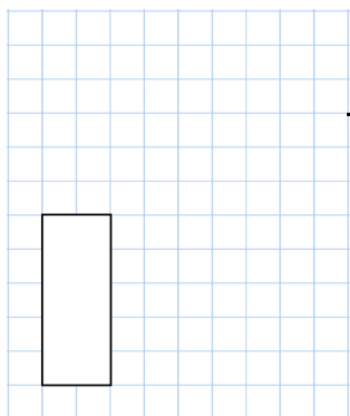



Name: \_\_\_\_\_

Primary 5-a-day

Gold



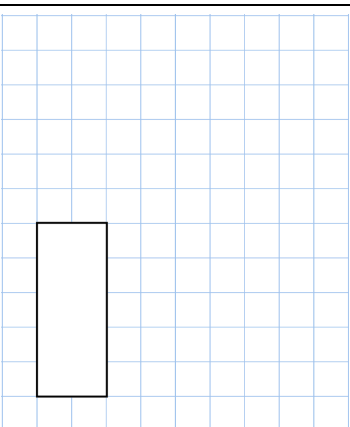
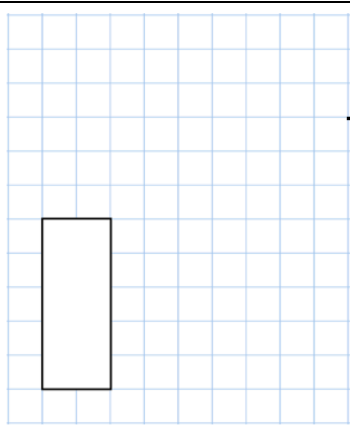

<p><b>27th October</b></p> $\frac{2}{11} = \frac{28}{\square}$ 	$20 \overline{) 1080}$ 
<p>What is the perimeter of this rectangle?</p>	<p>5.7 cm</p>  <p>3.46 cm</p>
<p>Two of the fractions are equivalent</p> <p>Circle the equivalent fractions.</p> $\frac{2}{3} \quad \frac{12}{15} \quad \frac{9}{12} \quad \frac{16}{20} \quad \frac{6}{10}$	
<p>Michael and Rosie each have a bottle of water.</p> <p>Michael's bottle contains <math>1\frac{3}{4}</math> litres</p> <p>Rosie's bottle contains 2.2 litres.</p>	<p>How many more <b>millilitres</b> of water does Rosie have than Michael?</p>

Name: \_\_\_\_\_

Primary 5-a-day

Gold



<p><b>27th October</b></p> $\frac{2}{11} = \frac{28}{\square}$ 	$20 \overline{) 1080}$ 
<p>What is the perimeter of this rectangle?</p>	<p>5.7 cm</p>  <p>3.46 cm</p>
<p>Two of the fractions are equivalent</p> <p>Circle the equivalent fractions.</p> $\frac{2}{3} \quad \frac{12}{15} \quad \frac{9}{12} \quad \frac{16}{20} \quad \frac{6}{10}$	
<p>Michael and Rosie each have a bottle of water.</p> <p>Michael's bottle contains <math>1\frac{3}{4}</math> litres</p> <p>Rosie's bottle contains 2.2 litres.</p>	<p>How many more <b>millilitres</b> of water does Rosie have than Michael?</p>