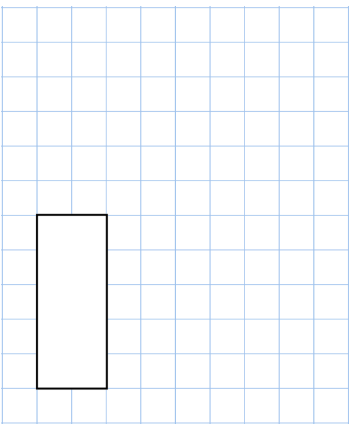
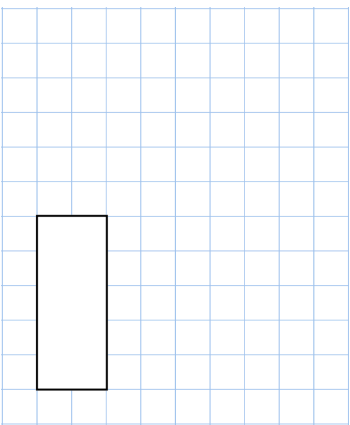
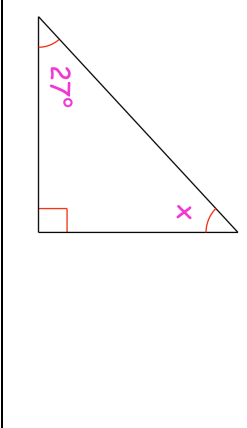
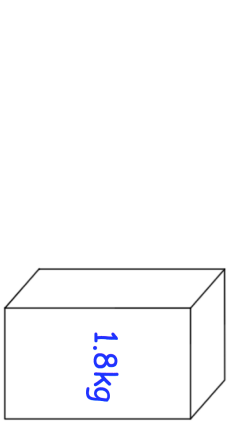
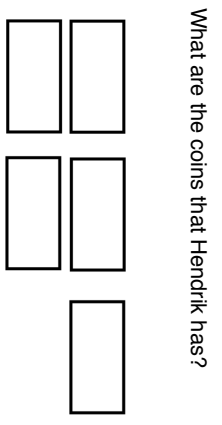


Name: \_\_\_\_\_

Primary 5-a-day

Gold



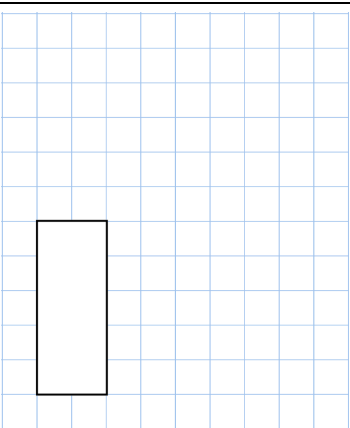
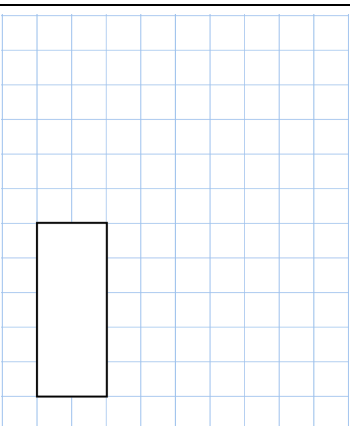
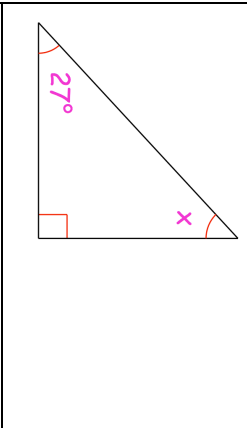
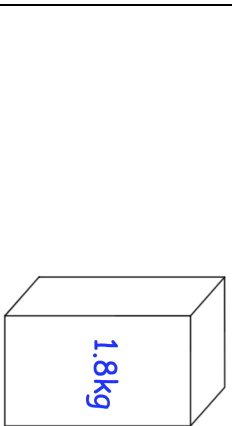
5th October	
$0.3 \div 10$	$2.76 + 1.451$
	
<input type="text"/>	<input type="text"/>
	Calculate the size of angle x
A box contains 1.8kg of rice Laura uses 45 grams of rice for each meal. She uses all the rice. How many meals did Laura make?	
Hendrik has five coins. Three of the coins add to £1.40 Three of the coins add up to £2.40 All five coins add up to £3.60	What are the coins that Hendrik has? 

Name: \_\_\_\_\_

Primary 5-a-day

Gold



5th October	
$0.3 \div 10$	$2.76 + 1.451$
	
<input type="text"/>	<input type="text"/>
	Calculate the size of angle x
A box contains 1.8kg of rice Laura uses 45 grams of rice for each meal. She uses all the rice. How many meals did Laura make?	
Hendrik has five coins. Three of the coins add to £1.40 Three of the coins add up to £2.40 All five coins add up to £3.60	What are the coins that Hendrik has? 