

Name: _____

Primary 5-a-day

Bronze



12th March

$$\begin{array}{r} 53 \\ + 18 \\ \hline \end{array}$$

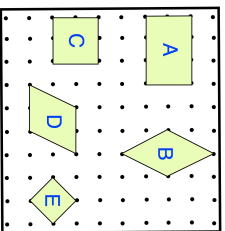
$$\begin{array}{r} 24 \\ \times 4 \\ \hline \end{array}$$

There are **75** marbles in a bag.

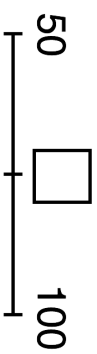
Thomas takes **18** marbles from the bag.
Jill takes **22** marbles from the bag.

How many marbles are **left**?

Which shapes are squares?



What number is **halfway** between 50 and 100?



Name: _____

Primary 5-a-day

Bronze



12th March

$$\begin{array}{r} 53 \\ + 18 \\ \hline \end{array}$$

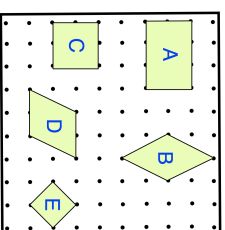
$$\begin{array}{r} 24 \\ \times 4 \\ \hline \end{array}$$

There are **75** marbles in a bag.

Thomas takes **18** marbles from the bag.
Jill takes **22** marbles from the bag.

How many marbles are **left**?

Which shapes are squares?



What number is **halfway** between 50 and 100?

