

Name: _____

Primary 5-a-day

Bronze

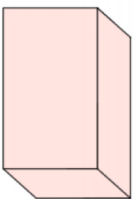
13th March



$$50 \times 4$$

$$\begin{array}{r} 2 \\ \times 5 \\ \hline 6 \end{array}$$

How many edges does a cuboid have?



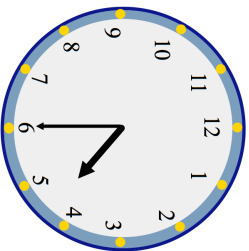
Vinnie has **four** coins

He has 90p

Write what the four coins could be

<input type="text"/>	<input type="text"/>	<input type="text"/>	<input type="text"/>
----------------------	----------------------	----------------------	----------------------

What time is shown on the clock?



Name: _____

Primary 5-a-day

Bronze

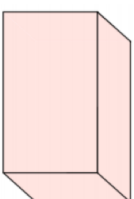
13th March



$$50 \times 4$$

$$\begin{array}{r} 2 \\ \times 5 \\ \hline 6 \end{array}$$

How many edges does a cuboid have?



Vinnie has **four** coins

He has 90p

Write what the four coins could be

<input type="text"/>	<input type="text"/>	<input type="text"/>	<input type="text"/>
----------------------	----------------------	----------------------	----------------------

What time is shown on the clock?

