

Name: _____

Primary 5-a-day

Bronze



19th March

$$\begin{array}{r} 35 \\ \times 3 \\ \hline \end{array}$$

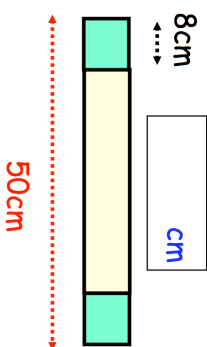
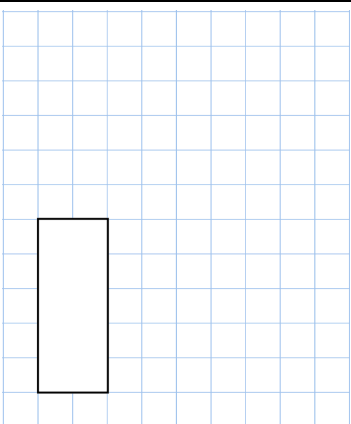


A yellow block and two green blocks are placed in a row.

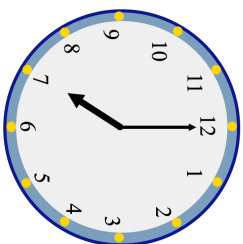
The two green blocks are the same size.

Find the length of the yellow block

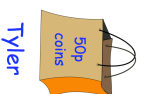
$$4,000 - 300$$



What time is shown on the clock?



Dan has a bag of 10p coins and Tyler has a bag of 50p coins. Both bags have the same amount of money inside. There are **forty** 10p coins in Dan's bag. How many 50p coins are there in Tyler's bag?



Name: _____

Primary 5-a-day

Bronze



19th March

$$\begin{array}{r} 35 \\ \times 3 \\ \hline \end{array}$$

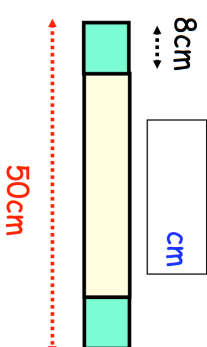
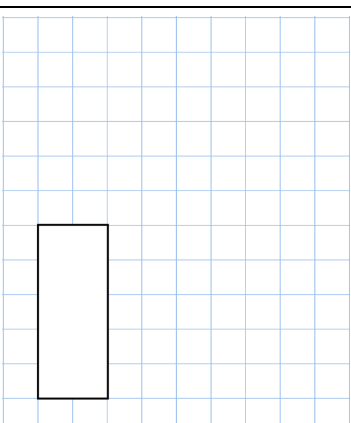


A yellow block and two green blocks are placed in a row.


The two green blocks are the same size.

Find the length of the yellow block

$$4,000 - 300$$



What time is shown on the clock?



Dan has a bag of 10p coins and Tyler has a bag of 50p coins. Both bags have the same amount of money inside. There are **forty** 10p coins in Dan's bag. How many 50p coins are there in Tyler's bag?

