

Name: _____

Primary 5-a-day

Bronze



20th March

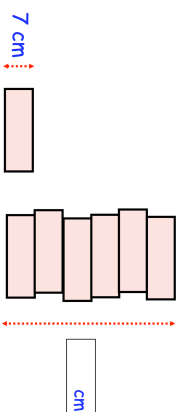
$$3 \times 10 \times 4$$

$$\begin{array}{r} 4 \\ \hline 5 \\ 2 \end{array}$$

A wooden block is 7cm tall

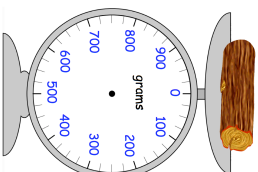
Jonah makes a tower using 6 blocks.

How tall is the tower?



A wooden log has a mass of 750g

Show 750g on the scales with an arrow



Clara has written down a three-digit number

?	?	?
---	---	---

All the digits are even
The digits add up to 8

What could her number be?

--	--	--

Name: _____

Primary 5-a-day

Bronze



20th March

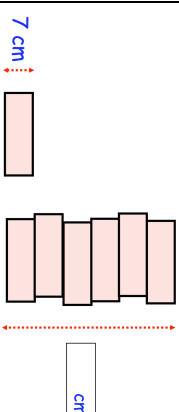
$$3 \times 10 \times 4$$

$$\begin{array}{r} 4 \\ \hline 5 \\ 2 \end{array}$$

A wooden block is 7cm tall

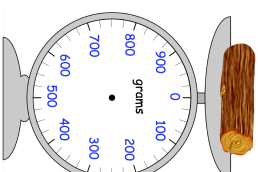
Jonah makes a tower using 6 blocks.

How tall is the tower?



A wooden log has a mass of 750g

Show 750g on the scales with an arrow



Clara has written down a three-digit number

?	?	?
---	---	---

All the digits are even
The digits add up to 8

What could her number be?

--	--	--