

Name: _____

Primary 5-a-day

Bronze



26th March

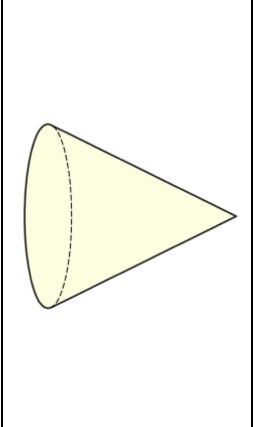

7×7

<input type="text"/>

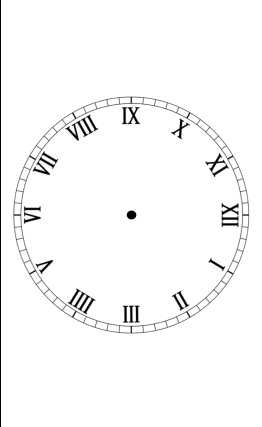
$115 - 60$

<input type="text"/>

Name this 3D shape



Show 7:15 on the clock



Max has 48 marbles

He shares them equally between 3 friends

How many marbles does each friend get?



Name: _____

Primary 5-a-day

Bronze



26th March

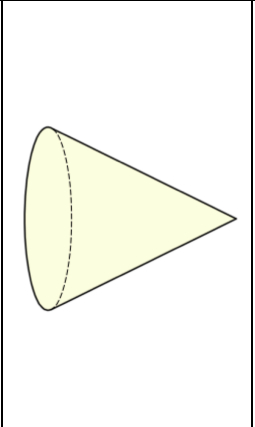

7×7

<input type="text"/>

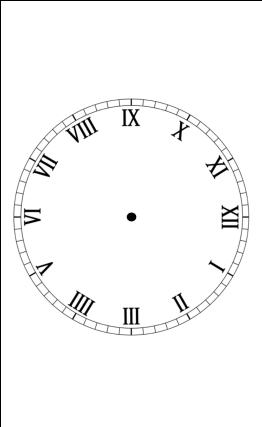
$115 - 60$

<input type="text"/>

Name this 3D shape



Show 7:15 on the clock



Max has 48 marbles

He shares them equally between 3 friends

How many marbles does each friend get?

