

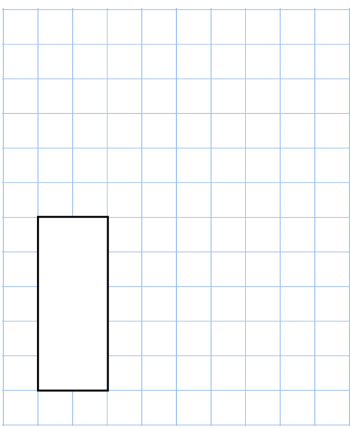
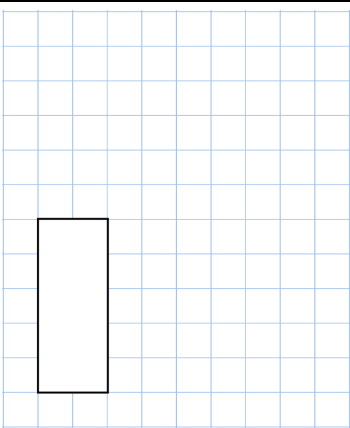
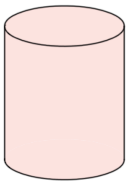
Name: \_\_\_\_\_

Primary 5-a-day

Bronze

27th March



$66 \div 6$	$30 \times 40$
	
Name this 3D shape	
Here is a multiplication grid Fill in the missing numbers	$\begin{array}{r l} \times & 8 & 5 \\ \hline & 16 & \\ \hline & & 20 \end{array}$
Fill in the missing numbers	$\begin{array}{r} 9 \square \\ - \square 7 \\ \hline 34 \end{array}$

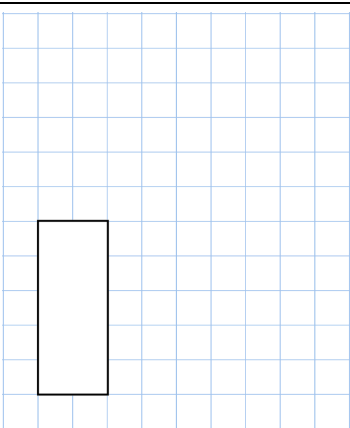
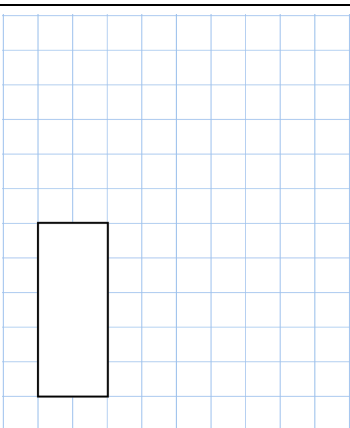
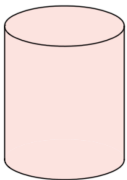
Name: \_\_\_\_\_

Primary 5-a-day

Bronze

27th March



$66 \div 6$	$30 \times 40$
	
Name this 3D shape	
Here is a multiplication grid Fill in the missing numbers	$\begin{array}{r l} \times & 8 & 5 \\ \hline & 16 & \\ \hline & & 20 \end{array}$
Fill in the missing numbers	$\begin{array}{r} 9 \square \\ - \square 7 \\ \hline 34 \end{array}$