

Name: _____

Primary 5-a-day

Bronze



29th March

$$40 \div 5$$

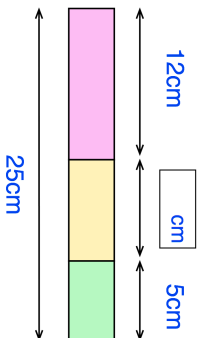
<input type="text"/>

$$3 \times 80$$

<input type="text"/>

A red block, yellow block and green block are placed in a row.

Find the length of the yellow block



Tilly buys a teddy buy that cost £6.50
She pays with a £10 note



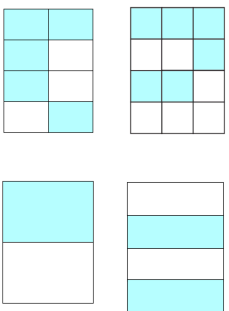
£6.50

Tilly buys a teddy buy that cost £6.50
She pays with a £10 note

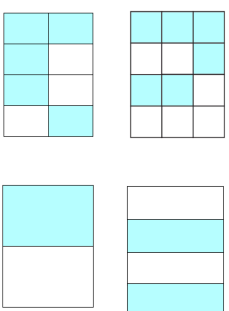


£6.50

Circle the shape that does not have $\frac{1}{2}$ shaded



Circle the shape that does not have $\frac{1}{2}$ shaded



Name: _____

Primary 5-a-day

Bronze



29th March

$$40 \div 5$$

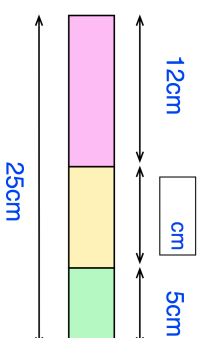
<input type="text"/>

$$3 \times 80$$

<input type="text"/>

A red block, yellow block and green block are placed in a row.

Find the length of the yellow block



Tilly buys a teddy buy that cost £6.50
She pays with a £10 note



£6.50

Circle the shape that does not have $\frac{1}{2}$ shaded

