

Name: _____

Primary 5-a-day

Bronze



3rd March

$$700 - 31$$

Grid for calculation

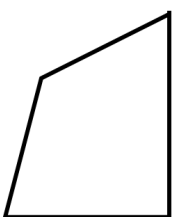
$$33 + 65$$

Grid for calculation

Write the three missing numbers in this multiplication grid.

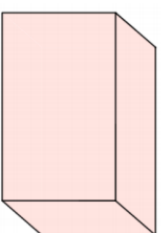
x	3	
4	12	20
		35

In this shape, one of the angles is a **right angle**



Tick the **right angle**

Name this shape



Name: _____

Primary 5-a-day

Bronze



3rd March

$$700 - 31$$

Grid for calculation

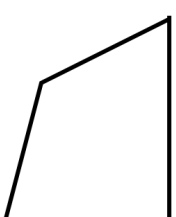
$$33 + 65$$

Grid for calculation

Write the three missing numbers in this multiplication grid.

x	3	
4	12	20
		35

In this shape, one of the angles is a **right angle**



Tick the **right angle**

Name this shape

