

30th March



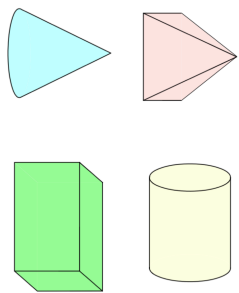
$$62 \div 2$$

Grid for calculation of $62 \div 2$. Below the grid is a rectangular box for the answer.

$$4 \times 9$$

Grid for calculation of 4×9 . Below the grid is a rectangular box for the answer.

Circle the shape that has the most faces



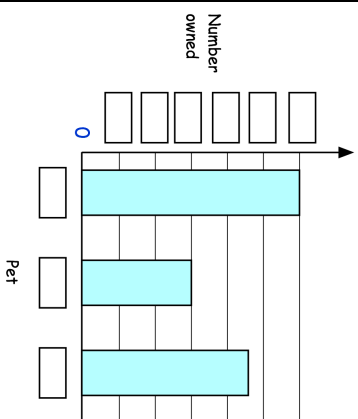
Alice collected information about the pets her friends owned.

Here are her results

Pet	Number owned
Dog	6
Cat	9
Rabbit	12

The bar chart shows the information from the table

Fill in **all** the missing labels



30th March



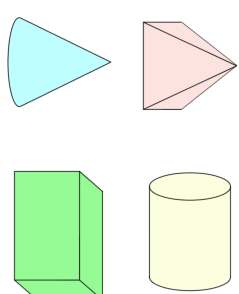
$$62 \div 2$$

Grid for calculation of $62 \div 2$. Below the grid is a rectangular box for the answer.

$$4 \times 9$$

Grid for calculation of 4×9 . Below the grid is a rectangular box for the answer.

Circle the shape that has the most faces



Alice collected information about the pets her friends owned.

Here are her results

Pet	Number owned
Dog	6
Cat	9
Rabbit	12

The bar chart shows the information from the table

Fill in **all** the missing labels

