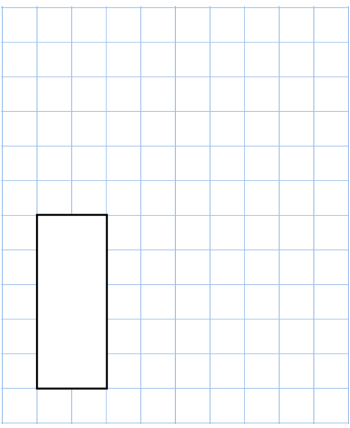
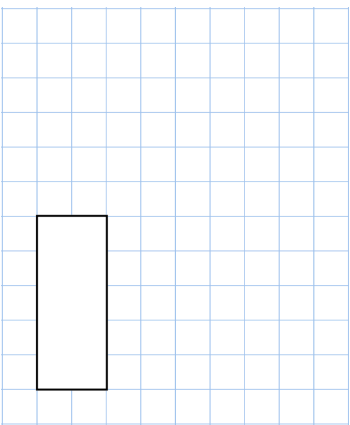



Name: _____

Primary 5-a-day

Gold



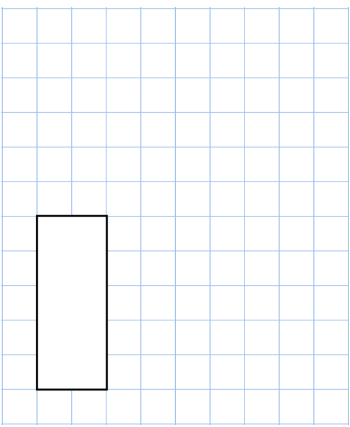
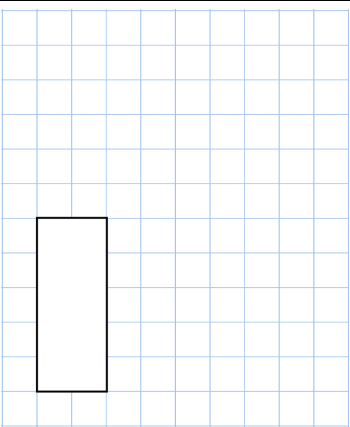

22nd March	8.5 ÷ 5	4,225 × 4
		
	<input type="text"/>	<input type="text"/>
Barnsley Rovers started a football season on -10 points. Each win is worth 3 points. Each draw is worth 1 point. Each loss is worth 0 points. Over the season, Barnsley Rovers won 11 matches, drew 6 matches and lost 3. How many points did they finish with at the end of the season?		
Find two different square numbers that have a total of 100	<input type="text"/> + <input type="text"/> = 100	

Name: _____

Primary 5-a-day

Gold



22nd March	8.5 ÷ 5	4,225 × 4
		
	<input type="text"/>	<input type="text"/>
Barnsley Rovers started a football season on -10 points. Each win is worth 3 points. Each draw is worth 1 point. Each loss is worth 0 points. Over the season, Barnsley Rovers won 11 matches, drew 6 matches and lost 3. How many points did they finish with at the end of the season?		
Find two different square numbers that have a total of 100	<input type="text"/> + <input type="text"/> = 100	