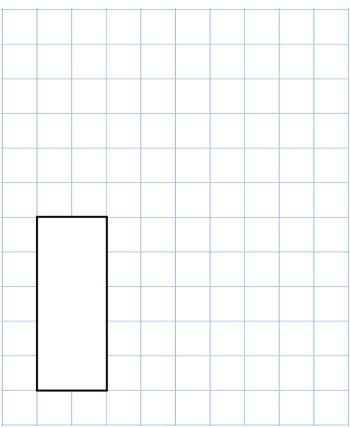
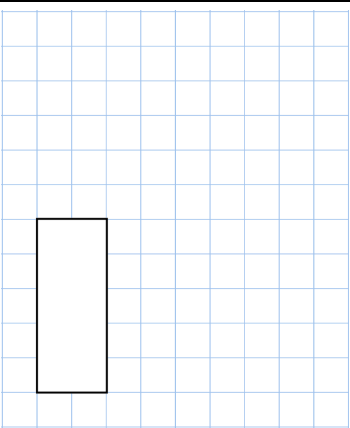




Name: _____

Primary 5-a-day

Gold



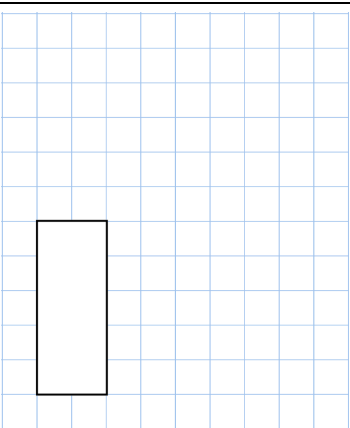
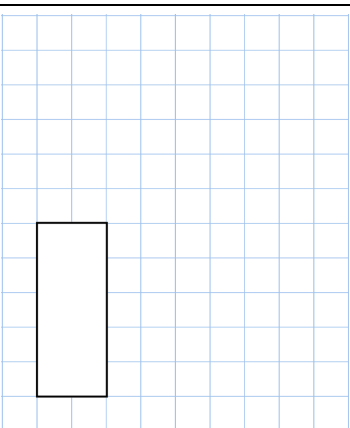


28th March	Gold
$665 \div 7$	0.05×10
	
<p>Megan says "when you square a number, the answer is always bigger." Show she is wrong.</p>	
<p>Work out the perimeter of this shape</p> 	<p>Write what the numbers could be</p> 
<p>Rocco has a pack of cards numbered 1 to 60. He picks four different cards. Exactly three of the cards are multiples of 15. Exactly three of the cards are even. All four numbers add up to less than 110</p>	

Name: _____

Primary 5-a-day

Gold



28th March	Gold
$665 \div 7$	0.05×10
	
<p>Megan says "when you square a number, the answer is always bigger." Show she is wrong.</p>	
<p>Work out the perimeter of this shape</p> 	<p>Write what the numbers could be</p> 
<p>Rocco has a pack of cards numbered 1 to 60. He picks four different cards. Exactly three of the cards are multiples of 15. Exactly three of the cards are even. All four numbers add up to less than 110</p>	