

Name: \_\_\_\_\_

Primary 5-a-day

Gold

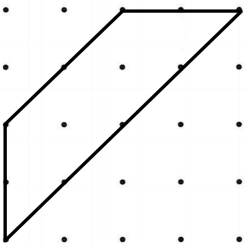
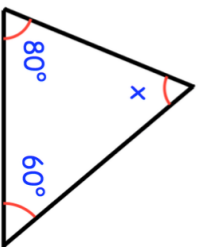


6th March

$$\begin{array}{r} 79 \\ \times 32 \\ \hline \end{array}$$


50% of 53

Find x



Paige draws this shape on a grid  
She turns her grid one quarter turn  
anticlockwise

Draw the shape in its new position after  
the turn



Name: \_\_\_\_\_

Primary 5-a-day

Gold

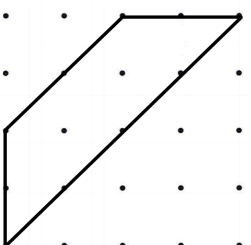
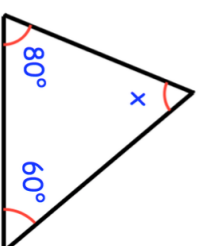


6th March

$$\begin{array}{r} 79 \\ \times 32 \\ \hline \end{array}$$

50% of 53

Find x



Paige draws this shape on a grid  
She turns her grid one quarter turn  
anticlockwise

Draw the shape in its new position after  
the turn

