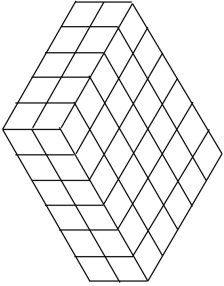



Name: \_\_\_\_\_

Primary 5-a-day

Gold



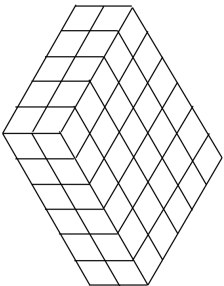
9th March		
$92$	$987 + 1,454 + 5,008$	
<p>Martha says that 7.2 is less than <math>7\frac{19}{100}</math>. Is she right?</p>		
<p>Each cube has a volume of <math>1\text{cm}^3</math>. Work out the volume of the cuboid</p>		
<p>A snowboarder completes 4 somersaults in a jump. How many degrees does she turn through in the jump?</p>		

Name: \_\_\_\_\_

Primary 5-a-day

Gold



9th March		
$92$	$987 + 1,454 + 5,008$	
<p>Martha says that 7.2 is less than <math>7\frac{19}{100}</math>. Is she right?</p>		
<p>Each cube has a volume of <math>1\text{cm}^3</math>. Work out the volume of the cuboid</p>		
<p>A snowboarder completes 4 somersaults in a jump. How many degrees does she turn through in the jump?</p>	