



22nd March

$$\frac{1}{3} + \frac{1}{2}$$

--

$$-18 - 25$$

--


Adam is organising a charity concert at school.

The concert is sold out.

The hall holds 35 rows of 42 seats.

Each person pays £18

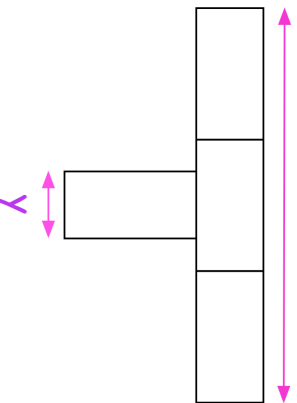
How much money will Adam raise for charity?



Here is a shape made from 4 identical rectangles.

The total area is 336 cm^2

36cm



22nd March

$$\frac{1}{3} + \frac{1}{2}$$

--

$$-18 - 25$$

--


Adam is organising a charity concert at school.

The concert is sold out.

The hall holds 35 rows of 42 seats.

Each person pays £18

How much money will Adam raise for charity?



Here is a shape made from 4 identical rectangles.

The total area is 336 cm^2

36cm

