

Name: \_\_\_\_\_

Primary 5-a-day

Platinum

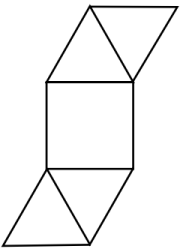


3rd March

$$0.07 \times 200$$

$$9\% \text{ of } 300$$

This is a net for which 3D shape?

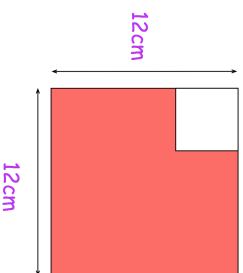


Concrete is made by mixing **cement**, **sand** and **gravel** in the ratio 1 : 2 : 3

How many kilograms of **cement** and **gravel** are needed to mix with 30 kilograms of sand?

\_\_\_\_\_ kg of cement      \_\_\_\_\_ kg of gravel

A white square is painted in one corner of a red square.  
Each side of the white square is **a third** of the length of the red square.  
What is the area of the red section?



Name: \_\_\_\_\_

Primary 5-a-day

Platinum

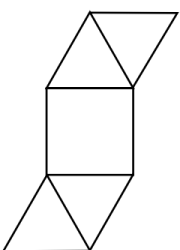


3rd March

$$0.07 \times 200$$

$$9\% \text{ of } 300$$

This is a net for which 3D shape?



Concrete is made by mixing **cement**, **sand** and **gravel** in the ratio 1 : 2 : 3

How many kilograms of **cement** and **gravel** are needed to mix with 30 kilograms of sand?

\_\_\_\_\_ kg of cement      \_\_\_\_\_ kg of gravel

A white square is painted in one corner of a red square.  
Each side of the white square is **a third** of the length of the red square.  
What is the area of the red section?

