



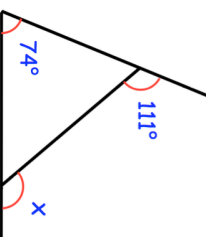
31st March

$$325 \div 13$$

$$700 - 100 \times 5 + 90$$



Work out the size of angle x



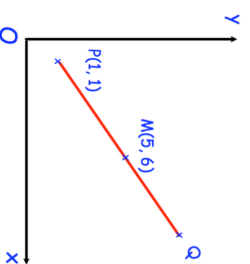
Helen has used 80% of the coffee in a jar.

120 grams of coffee is left in the jar.

How much coffee does a full jar hold?

M is the midpoint of the line PQ.

Find the coordinates of Q



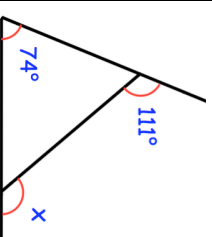
31st March

$$325 \div 13$$

$$700 - 100 \times 5 + 90$$



Work out the size of angle x



Helen has used 80% of the coffee in a jar.

120 grams of coffee is left in the jar.

How much coffee does a full jar hold?

M is the midpoint of the line PQ.

Find the coordinates of Q

