

Name: \_\_\_\_\_

Primary 5-a-day

Silver

1st March

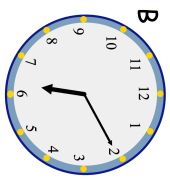


$$3,232 + 800$$

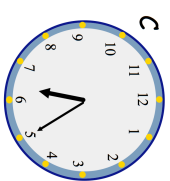
<div style="background-color: #e0e0e0; width: 100%; height: 100%;"></div>
---

$$7 \times 56$$

<div style="background-color: #e0e0e0; width: 100%; height: 100%;"></div>
---



D



Which clock shows 17:30?

Which clock shows 18:25?

Beth runs 200m on Monday, Tuesday, Wednesday, Thursday and Friday.

How far has she run in total?

Give your answer in kilometres

Name: \_\_\_\_\_

Primary 5-a-day

Silver

1st March

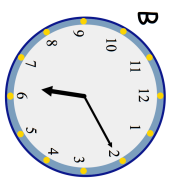
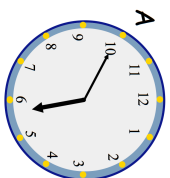


$$3,232 + 800$$

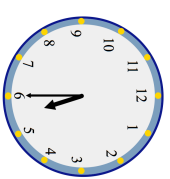
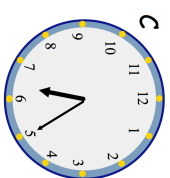
<div style="background-color: #e0e0e0; width: 100%; height: 100%;"></div>
---

$$7 \times 56$$

<div style="background-color: #e0e0e0; width: 100%; height: 100%;"></div>
---



D



Which clock shows 17:30?

Which clock shows 18:25?

Beth runs 200m on Monday, Tuesday, Wednesday, Thursday and Friday.

How far has she run in total?

Give your answer in kilometres