

Name: _____

Primary 5-a-day

Silver

14th March



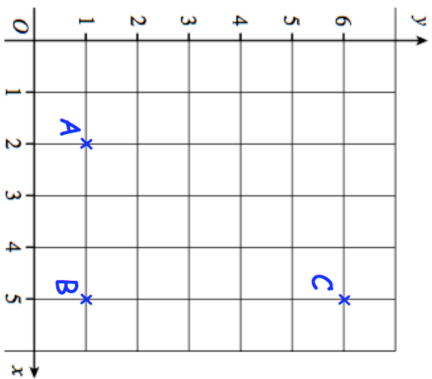
$$524 - 180$$

<input type="text"/>

$$7 \times 33$$

<input type="text"/>

Write down the coordinates of the point B

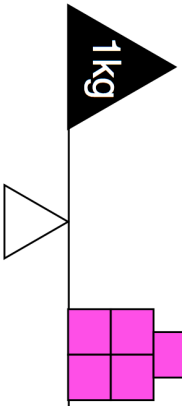


ABCD is a rectangle.

Plot the point D on the grid

5 identical pink blocks have a mass of 1kg

Find the mass one pink block



Name: _____

Primary 5-a-day

Silver

14th March



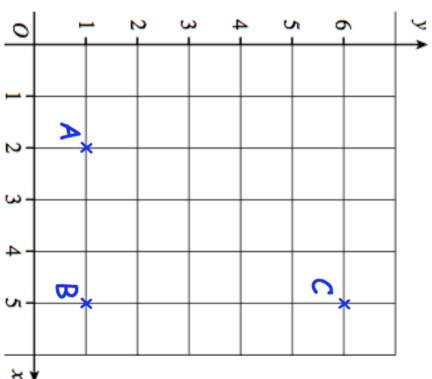
$$524 - 180$$

<input type="text"/>

$$7 \times 33$$

<input type="text"/>

Write down the coordinates of the point B



ABCD is a rectangle.

Plot the point D on the grid

5 identical pink blocks have a mass of 1kg

Find the mass one pink block

