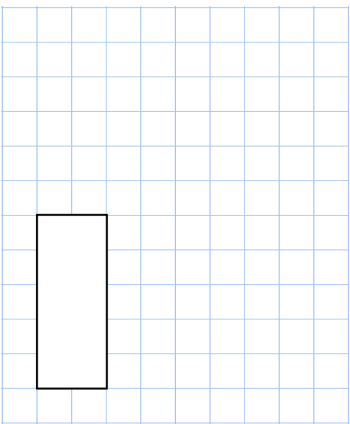
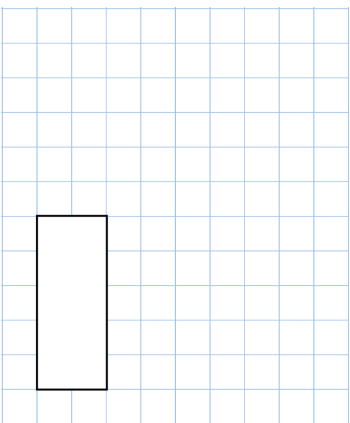


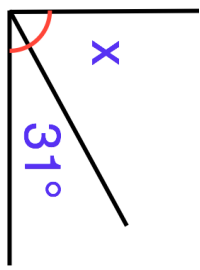


Name: \_\_\_\_\_

Primary 5-a-day

Silver



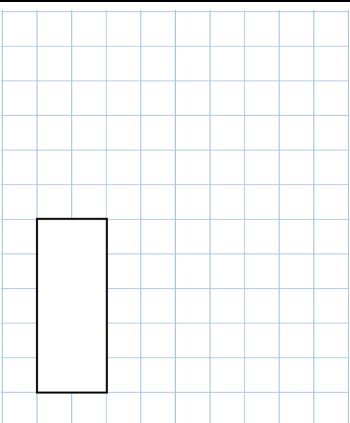
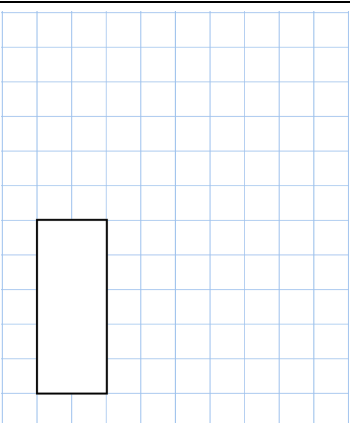


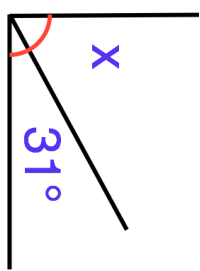
<b>16th March</b>	
$8 \times 12$	$3\frac{3}{5} + \frac{1}{5}$
	
Round 36.81 to the nearest whole number	Write the <b>digit</b> that is in the tens place
	
A right angle is shown Find the size of the angle x	
Miss Jackson has 500 sweets. She gives 2 sweets each to 76 children and she gives 3 sweets each to 15 children. How many sweets does Miss Jackson have left?	

Name: \_\_\_\_\_

Primary 5-a-day

Silver



<b>16th March</b>	
$8 \times 12$	$3\frac{3}{5} + \frac{1}{5}$
	
Round 36.81 to the nearest whole number	Write the <b>digit</b> that is in the tens place
	
A right angle is shown Find the size of the angle x	
Miss Jackson has 500 sweets. She gives 2 sweets each to 76 children and she gives 3 sweets each to 15 children. How many sweets does Miss Jackson have left?	