

17th March

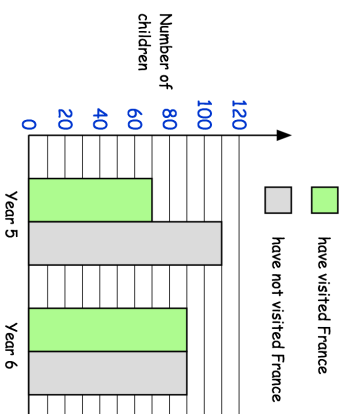


$$8.4 - 1.9$$

--	--

$$47 \times 4$$

--	--




How many year 5 children have **not** visited France?

Billy says there are the same number of children in Year 5 and Year 6. Is he right?

A group of 9 friends go on a coach tour.

The total cost for the tour is £648

Work out the cost for 1 person?



17th March

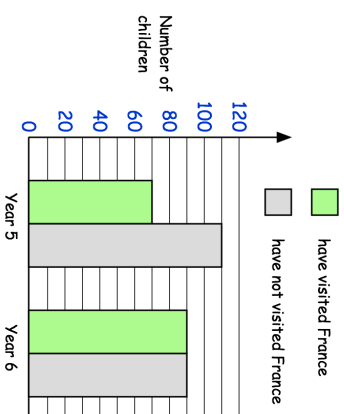


$$8.4 - 1.9$$

--	--

$$47 \times 4$$

--	--



How many year 5 children have **not** visited France?

Billy says there are the same number of children in Year 5 and Year 6. Is he right?

A group of 9 friends go on a coach tour.

The total cost for the tour is £648

Work out the cost for 1 person?

