

Name: \_\_\_\_\_

Primary 5-a-day

Silver

24th March



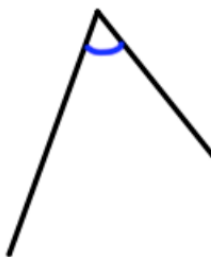
$$5 \times 6 \times 7 \times 2$$

Grid area for calculation:

$$7 \frac{5}{9} - \frac{5}{9}$$

Grid area for calculation:

What type of angle is shown?



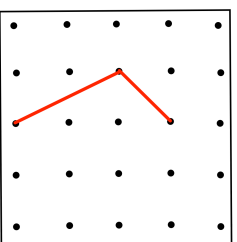
Shane looks at his watch

18 : 00

Circle the most likely thing that Shane is doing

Nigel is drawing a **kite** on the grid.

Finish drawing the **kite** on the grid.



Name: \_\_\_\_\_

Primary 5-a-day

Silver

24th March



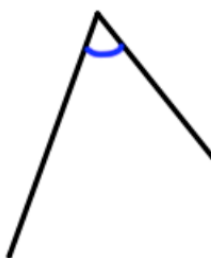
$$5 \times 6 \times 7 \times 2$$

Grid area for calculation:

$$7 \frac{5}{9} - \frac{5}{9}$$

Grid area for calculation:

What type of angle is shown?



Shane looks at his watch

18 : 00

Circle the most likely thing that Shane is doing

Nigel is drawing a **kite** on the grid.

Finish drawing the **kite** on the grid.

