

Name: _____

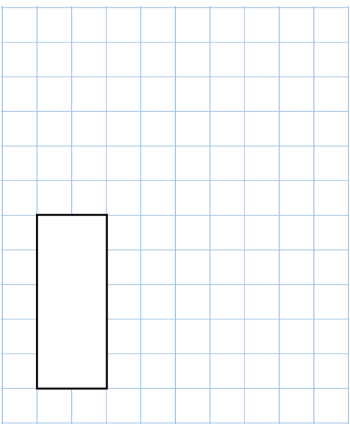
Primary 5-a-day

Silver

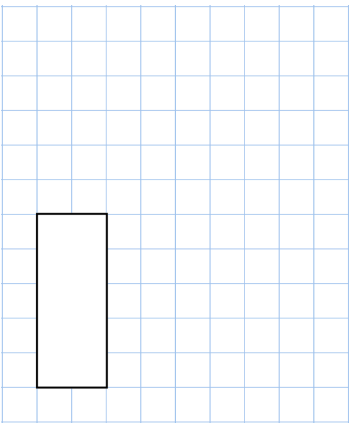


26th March

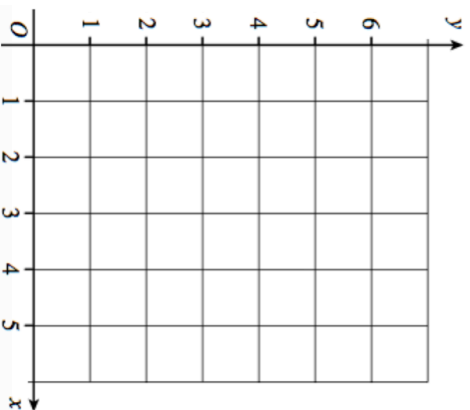
$$7 \times 13$$



$$2,581 - 192$$

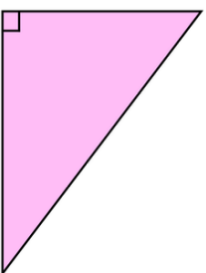


Plot the points (4, 4) and (5, 1)



What is the name given to the point (0, 0)?

What type of triangle is shown?



Name: _____

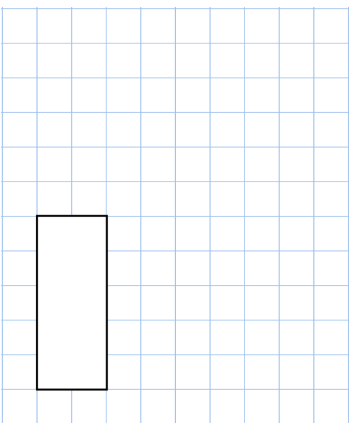
Primary 5-a-day

Silver

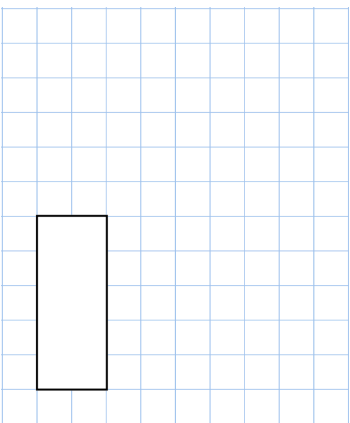


26th March

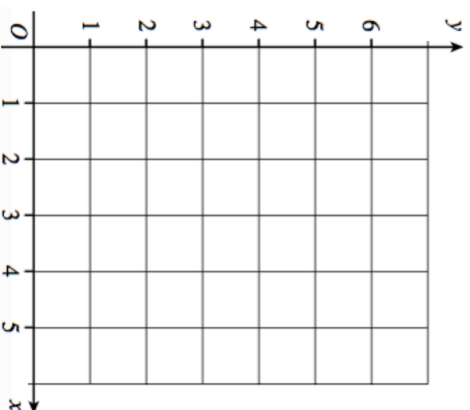
$$7 \times 13$$



$$2,581 - 192$$



Plot the points (4, 4) and (5, 1)



What is the name given to the point (0, 0)?

What type of triangle is shown?

