

Name: \_\_\_\_\_

Primary 5-a-day

Silver



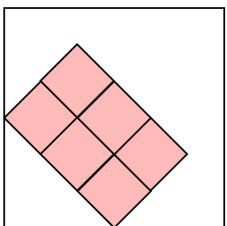
31st March

$$5\frac{5}{6} - 4\frac{4}{6}$$

$$8,080 - 404$$

This square tile has a symmetrical pattern

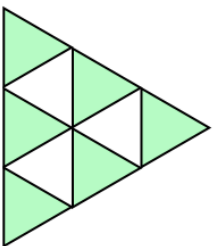
Draw the line of symmetry on it



Change 4 metres into centimetres

Change 7000 kilometres into metres

What fraction of this shape is **not** shaded?



Name: \_\_\_\_\_

Primary 5-a-day

Silver



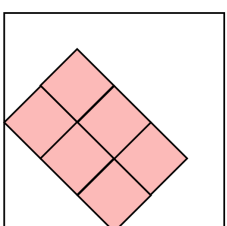
31st March

$$5\frac{5}{6} - 4\frac{4}{6}$$

$$8,080 - 404$$

This square tile has a symmetrical pattern

Draw the line of symmetry on it



Change 4 metres into centimetres

Change 7000 kilometres into metres

What fraction of this shape is **not** shaded?

